



# Using A.M. and P.M.

I can use a.m. and p.m. to say whether things happen before or after noon.



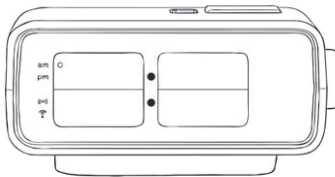
1) Write these times in digital form. One has been done for you.

a)



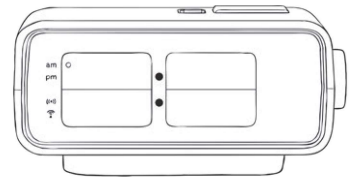
5 past 11

b)



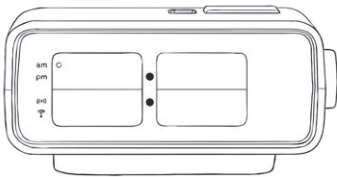
20 to 8

c)



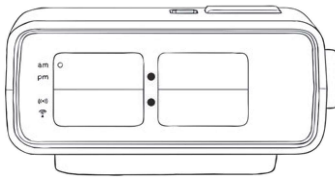
25 past 11

d)



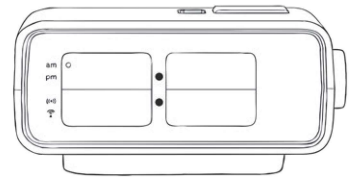
10 to 9

e)



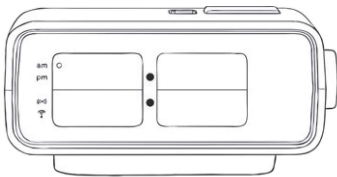
25 to 6

f)



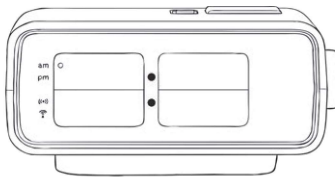
5 past 12

g)



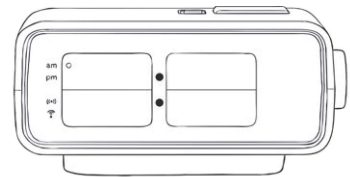
5 to 7

h)



quarter to 4

i)



20 past 11





2) Order these times from the earliest in the day to the latest.

2:30 p.m.	7:10 a.m.	8:40 p.m.	12:35 p.m.	6:50 a.m.	9:20 a.m.	9:05 p.m.	11:15 a.m.
-----------	-----------	-----------	------------	-----------	-----------	-----------	------------

earliest	←—————→						latest

3) Write these school times in digital form, using a.m. and p.m. One has been done for you.

school starts	5 past 9	<b>9:05 a.m.</b>
literacy	10 past 9	
reading	20 past 10	
playtime	25 to 11	
maths	quarter to 11	
lunch time	5 past 12	
R.E.	10 to 1	
science	20 to 2	
Spanish	25 past 2	
home time	10 past 3	

4) Answer these questions about the school day. Show your working out.

a) How long does maths last? \_\_\_\_\_

b) How long does Spanish last? \_\_\_\_\_

c) How long does lunch time last? \_\_\_\_\_