

# Gala Day




How many  
flags?

$9 + 8 = \square$

$8 + 9 = \square$

$17 - 8 = \square$

$17 - 9 = \square$



2


How many  
balloons?

$10 + 7 = \square$

$7 + 10 = \square$

$17 - 7 = \square$

$17 - 10 = \square$



3


How many  
spots?

$10 + 8 = \square$

$8 + 10 = \square$

$18 - 8 = \square$

$18 - 10 = \square$



4

How many  
flowers?

$9 + 9 = \square$

$18 - 9 = \square$