





Counting Money Worksheet

Count the coins and notes to find the total amount of money

1.	
2.	
3.	
4.	
5.	
6.	
7.	
8.	
9.	

Name: _____ Date: _____

10.



11.



12.



Name: _____ Date: _____

Answer Key

1. £6.70
2. £3.00
3. £0.53
4. £5.05
5. £6.20
6. £3.63
7. £5.04
8. £3.03
9. £2.30
10. £5.30
11. £9.90
12. £1.55